

# NIMCET 2022 Toppers

## ASPIRE STUDY



**AIR 1**  
NEERAJ KUMAR



**AIR 6**  
RITABRAT



**AIR 10**  
PRASANJEET



**AIR 16**  
PAWAN AGRAWAL



**AIR 18**  
ANCHAL DHOTE



**AIR 26**  
ADITYA BHANDARI



**AIR 47**  
BALASAINATH



**AIR 64**  
BIPLAW KUMAR



**AIR 65**  
RAHUL MAITY



**AIR 71**  
PUSHKAR



**AIR 74**  
MANVENDRA



**AIR 78**  
ASHUTOSH



**AIR 82**  
SHAILESH SHUKLA



**AIR 89**  
MAYANK KUMAR



**AIR 93**  
AMAN SEHGAL



**AIR 94**  
ABHISHEK



**AIR 95**  
MADHUR



**AIR 103**  
RASHI SUMAN



**AIR 106**  
YASH GUPTA



**AIR 107**  
RAKESH



**AIR 110**  
HIMANSHU NEGI



**AIR 113**  
SHREYAS



**AIR 114**  
SUSANTA BERA



**AIR 120**  
PRAKASH KUMAR



**AIR 123**  
ANUJ SHARMA



**AIR 130**  
RAUNAK



**AIR 133**  
YASHPAL SINGH



**AIR 136**  
KARTIK



**AIR 143**  
VISHWAS UPADHYAY



**AIR 152**  
MADHUSUDAN



**AIR 167**  
ROHIT SHARMA



**AIR 173**  
PRANJAL PRATAP



**AIR 181**  
CHARITRA AGRAWAL



**AIR 186**  
JATIN



**AIR 191**  
RAJESH



**AIR 193**  
RADHIKA GUPTA



**AIR 199**  
SAGAL DEEP



**AIR 203**  
YASHASHWI GUPTA



**AIR 205**  
ABHIJEET



**AIR 208**  
HARSHITA GUPTA



**AIR 211**  
SAURABH



**AIR 213**  
MUKUL DEV



**AIR 220**  
AKANKSHA JAIN



**AIR 223**  
SAMARPIT GUPTA



**AIR 224**  
MANAS KUMAR



**AIR 227**  
SANCHIT MISHRA



**AIR 228**  
JIGYASA



**AIR 229**  
ANUBHAV



**ASPIRE STUDY MCA ENTRANCE CLASSES**

8400072444, 7007286637 [www.aspirestudy.in](http://www.aspirestudy.in)

Kanpur , Uttar Pradesh - 208024

**Install Aspire Study APP  
PLAY STORE**

**NIMCET 2022**

**Original Question Paper**

**Exam Date : 20-June-2022**

**Online Course | Classroom Course | Test Series**

**8400072444, 7007286637**

[www.aspirestudy.in](http://www.aspirestudy.in)

[www.myaspirestudy.com](http://www.myaspirestudy.com)

**ASPIRE STUDY MCA Entrance Classes Kanpur  
[www.aspirestudy.in](http://www.aspirestudy.in) 8400072444 | 7007286637**



# ASPIRE STUDY MCA ENTRANCE CLASSES

8400072444, 7007286637 www.aspirestudy.in

Kanpur , Uttar Pradesh - 208024

## MATHEMATICS

- Inverse of the function  $f(x) = \frac{10^x - 10^{-x}}{10^x + 10^{-x}}$  is  
(a)  $\log_{10}(2 - x)$  (b)  $\frac{1}{2} \log_{10} \left( \frac{1+x}{1-x} \right)$   
(c)  $\frac{1}{2} \log_{10}(2x - 1)$  (d)  $\frac{1}{4} \log_{10} \left( \frac{2x}{2-x} \right)$
- Let  $a, b, c$  be distinct non-negative numbers. If the vectors  $a\hat{i} + a\hat{j} + c\hat{k}$ ,  $\hat{i} + \hat{k}$  and  $c\hat{i} + c\hat{j} + b\hat{k}$  lie in a plane, then  $c$  is  
(a) The Arithmetic Mean of  $a$  and  $b$   
(b) The Geometric Mean of  $a$  and  $b$   
(c) The Harmonic Mean of  $a$  and  $b$   
(d) Equal to zero
- The correct expression for  $\cos^{-1}(-x)$  is  
(a)  $\frac{\pi}{2} - \cos^{-1} x$  (b)  $\pi - \cos^{-1} x$   
(c)  $\pi + \cos^{-1} x$  (d)  $\frac{\pi}{2} + \cos^{-1} x$
- Suppose that the temperature at a point  $(x, y)$ , on a metal plate is  $T(x, y) = 4x^2 - 4xy + y^2$ . An ant, walking on the plate, traverses a circle of radius 5 centered at the origin. What is the highest temperature encountered by the ant?  
(a) 125 (b) 120  
(c) 0 (d) 25
- The 10th and 50th percentiles of the observation 32, 49, 23, 29, 118 respectively are  
(a) 21, 32 (b) 23, 32  
(c) 23, 33 (d) 22, 31
- Angles of elevation of the top of a tower from three points (collinear) A, B and C on a road leading to the foot of the tower are  $30^\circ$ ,  $45^\circ$  and  $60^\circ$  respectively. The ratio of AB and BC is  
(a)  $\sqrt{3}:1$  (b)  $\sqrt{3}:2$   
(c) 1:2 (d) 2:3
- If the foci of the ellipse  $\frac{x^2}{25} + \frac{y^2}{b^2} = 1$  and the hyperbola  $\frac{x^2}{144} - \frac{y^2}{81} = \frac{1}{25}$  are coincide, then the value of  $b^2$  is  
(a) 25 (b) 16  
(c) 64 (d) 49
- A particle is at rest at the origin. It moves along the  $x$ -axis with an acceleration  $x - x^2$ , where  $x$  is the distance of the particle at time  $t$ . The particle next comes to rest after it has covered a distance  
(a) 1 (b)  $\frac{1}{2}$   
(c)  $\frac{3}{2}$  (d) None of these
- If  $a < b$  then  $\int_a^b (|x - a| + |x - b|) dx$  is equal to  
(a)  $\frac{(b-a)^2}{2}$  (b)  $\frac{b^2 - a^2}{2}$   
(c)  $\frac{a^3 - b^3}{2}$  (d)  $(b - a)^2$
- The domain of the function  $f(x) = \frac{\cos^{-1} x}{[x]}$  is  
(a)  $[-1, 0) \cup \{1\}$  (b)  $[-1, 1]$   
(c)  $[-1, 1)$  (d) None of the above
- If the volume of the parallelepiped whose adjacent edges are  $\vec{a} = 2\hat{i} + 3\hat{j} + 4\hat{k}$ ,  $\vec{b} = \hat{i} + \alpha\hat{j} + 2\hat{k}$ , and  $\vec{c} = \hat{i} + 2\hat{j} + a\hat{k}$  is 15, then  $\alpha$  is equal to  
(a) 1 (b)  $5/2$   
(c)  $9/2$  (d) 0
- Let  $a$  be the distance between the lines  $-2x + y = 2$  and  $2x - y = 2$ , and  $b$  be the distance between the lines  $4x - 3y = 5$  and  $6y - 8x = 1$ , then



# ASPIRE STUDY MCA ENTRANCE CLASSES

8400072444, 7007286637 www.aspirestudy.in

Kanpur , Uttar Pradesh - 208024

- (a)  $40b = 11\sqrt{5}a$       (b)  $40\sqrt{2}a = 11b$   
(c)  $11\sqrt{2}b = 40a$       (d)  $11\sqrt{2}a = 40b$
13. If  $\operatorname{cosec} \theta - \cot \theta = 2$ , then the value of  $\operatorname{cosec} \theta$  is  
(a)  $\frac{5}{3}$       (b)  $\frac{3}{5}$   
(c)  $\frac{4}{5}$       (d)  $\frac{5}{4}$
14. The solution of the equation  $4 \cos^2 x + 6 \sin^2 x = 5$  are  
(a)  $x = n\pi \pm \frac{\pi}{4}$       (b)  $x = n\pi \pm \frac{\pi}{3}$   
(c)  $x = n\pi \pm \frac{\pi}{2}$       (d)  $x = n\pi \pm \frac{2\pi}{3}$
15. The function  $f(x) = \begin{cases} (1+2x)^{1/x}, & x \neq 0 \\ e^2, & x = 0 \end{cases}$ , is  
(a) Differentiable at  $x = 0$   
(b) Continuous at  $x = 0$   
(c) Discontinuous at  $x = 0$   
(d) Not differentiable at  $x = 0$
16. Which term of the series  $\frac{\sqrt{5}}{3}, \frac{\sqrt{5}}{4}, \frac{1}{\sqrt{5}}, \dots$  is  $\frac{\sqrt{5}}{13}$ ?  
(a) 12      (b) 11  
(c) 10      (d) 9
17. Let  $\vec{a} = 2\hat{i} + 2\hat{j} + \hat{k}$  and  $\vec{b}$  be another vector such that  $\vec{a} \cdot \vec{b} = 14$  and  $\vec{a} \times \vec{b} = 3\hat{i} + \hat{j} - 8\hat{k}$  the vector  $\vec{b} =$   
(a)  $5\hat{i} + \hat{j} + 2\hat{k}$       (b)  $5\hat{i} - \hat{j} - 2\hat{k}$   
(c)  $5\hat{i} + \hat{j} - 2\hat{k}$       (d)  $3\hat{i} + \hat{j} + 4\hat{k}$
18. The first three moments of a distribution about 2 are 1, 16, -40 respectively. The mean and variance of the distribution are  
(a) (2,16)      (b) (2,15)  
(c) (3,15)      (d) (1,16)
19. A survey is done among a population of 200 people who like either tea or coffee. It is found that 60% of the population like tea and 72% of the population like coffee. Let  $x$  be the number of people who like both tea & coffee. Let  $m \leq x \leq n$ , then choose the correct option.  
(a)  $n - m = 56$       (b)  $n - m = 28$   
(c)  $n - m = 32$       (d)  $n + m = 92$
20. The value of  $\cot \left( \operatorname{cosec}^{-1} \frac{5}{3} + \tan^{-1} \frac{2}{3} \right)$  is  
(a)  $6/17$       (b)  $3/17$   
(c)  $4/17$       (d)  $5/17$
21. If  $0 < P(A) < 1$  and  $0 < P(B) < 1$  and  $P(A \cap B) = P(A)P(B)$ , then  
(a)  $P(B|A) = P(B) - P(A)$   
(b)  $P(A^c - B^c) = P(A^c) - P(B^c)$   
(c)  $P(A \cup B)^c = P(A^c)P(B^c)$   
(d)  $P(A|B) = P(A) - P(B)$
22. Which of the following is NOT true?  
(a)  $\lim_{x \rightarrow \infty} \frac{x}{e^x} = 0$       (b)  $\lim_{x \rightarrow 0^+} \frac{1}{xe^{1/x}} = 0$   
(c)  $\lim_{x \rightarrow 0^+} \frac{\sin x}{1+2x} = 0$       (d)  $\lim_{x \rightarrow 0^+} \frac{\cos x}{1+2x} = 0$
23.  $f(x) = x + |x|$  is continuous for  
(a)  $x \in (-\infty, \infty)$   
(b)  $x \in (-\infty, \infty) - \{0\}$   
(c) only  $x > 0$   
(d) No value of  $x$
24. If  $a_1, a_2, \dots, a_n$  are any real numbers and  $n$  is any positive integer, then  
(a)  $n \sum_{i=1}^n a_i^2 < (\sum_{i=1}^n a_i)^2$   
(b)  $n \sum_{i=1}^n a_i^2 \geq (\sum_{i=1}^n a_i)^2$   
(c)  $\sum_{i=1}^n a_i^2 \geq (\sum_{i=1}^n a_i)^2$   
(d) None of the above



# ASPIRE STUDY MCA ENTRANCE CLASSES

8400072444, 7007286637 www.aspirestudy.in

Kanpur , Uttar Pradesh - 208024

25. If  $D = \begin{vmatrix} 1 & 1 & 1 \\ 1 & 2+x & 1 \\ 1 & 1 & 2+y \end{vmatrix}$  for  $x \neq 0, y \neq 0$ , then D is
- (a) Divisible by  $x$  and  $y$   
(b) Divisible by  $x$  but not by  $y$   
(c) Divisible by  $(1+x)$  and  $(1+y)$   
(d) Divisible by  $(1+x)$  but not  $(1+y)$
26. Area of the parallelogram formed by the lines  $y = 4x, y = 4x + 1, x + y = 0$  and  $x + y = 1$
- (a)  $\frac{1}{5}$  (b)  $\frac{2}{5}$   
(c) 5 (d) 10
27. A four-digit number is formed using the digits 1, 2, 3, 4, 5 without repetition. The probability that is divisible by 3 is
- (a)  $\frac{1}{3}$  (b)  $\frac{1}{4}$   
(c)  $\frac{1}{5}$  (d)  $\frac{1}{6}$
28. For  $a \in R$  (the set of all real numbers),  $a \neq 1$ ,  $\lim_{n \rightarrow \infty} \frac{(1^a + 2^a + \dots + n^a)}{(n+1)^{a-1} [(na+1)(na+2)\dots(na+n)]} = \frac{1}{60}$ . Then one of the value of  $a$  is
- (a) 5 (b) 8  
(c)  $-\frac{15}{2}$  (d)  $-\frac{17}{2}$
29. If  $\vec{a} = \lambda \hat{i} + \hat{j} - 2\hat{k}$ ,  $\vec{b} = \hat{i} + \lambda \hat{j} - 2\hat{k}$ ,  $\vec{c} = \hat{i} + \hat{j} + \hat{k}$  and  $[\vec{a} \vec{b} \vec{c}] = 7$ , then the values of  $\lambda$  are
- (a) 2, -6 (b) 6, -2  
(c) 5, -2 (d) -4, 2
30. The function  $f(x) = \log(x + \sqrt{x^2 + 1})$  is
- (a) an even function  
(b) an odd function  
(c) a periodic function  
(d) neither an even nor an odd function
31. The mean of 25 observations was found to be 38. It was later discovered that 23 and 38 were misread as 25 and 36, then the mean is
- (a) 32 (b) 36  
(c) 38 (d) 42
32. The area enclosed within the curve  $|x| + |y| = 2$  is
- (a) 16 sq.unit (b) 24 sq.unit  
(c) 32 sq.unit (d) 8 sq.unit
33. If  $\left(\frac{x}{a}\right)^2 + \left(\frac{y}{b}\right)^2 = 1$ ,  $(a > b)$  and  $x^2 - y^2 = c^2$  cut at right angles, then
- (a)  $a^2 + b^2 = 2c^2$  (b)  $b^2 - a^2 = 2c^2$   
(c)  $a^2 - b^2 = 2c^2$  (d)  $a^2 - b^2 = c^2$
34. If  $\alpha, \beta$  are the roots of  $x^2 - x - 1 = 0$  and  $A_n = \alpha^n + \beta^n$ , the Arithmetic mean of  $A_{n-1}$  and  $A_n$  is
- (a)  $2A_n - 1$  (b)  $\frac{1}{2}A_{n+1}$   
(c)  $2A_n - 2$  (d) none of the above
35. If  $a_1, a_2 \dots a_n$ , are in Arithmetic Progression with common difference  $d$ , then the sum  $(\sin d)(\operatorname{cosec} a_1 \cdot \operatorname{cosec} a_2 + \operatorname{cosec} a_2 \cdot \operatorname{cosec} a_3 + \dots + \operatorname{cosec} a_{n-1} \cdot \operatorname{cosec} a_n)$  is equal to
- (a)  $\cot a_1 - \cot a_n$   
(b)  $\sin a_1 - \sin a_n$   
(c)  $\operatorname{cosec} a_1 - \operatorname{cosec} a_n$   
(d)  $a_1 - a_n$
36. Solutions of the equation  $\tan^{-1} \sqrt{x^2 + x} + \sin^{-1} \sqrt{x^2 + x + 1} = \frac{\pi}{2}$  are
- (a) 0, -1 (b) 1, -1  
(c) 0, -1 (d) 0, -2



# ASPIRE STUDY MCA ENTRANCE CLASSES

8400072444, 7007286637 www.aspirestudy.in

Kanpur , Uttar Pradesh - 208024

37. In a Harmonic Progression,  $p^{\text{th}}$  term is  $q$  and the  $q^{\text{th}}$  term is  $p$ . Then  $pq^{\text{th}}$  term is  
(a) 0 (b)  $pq$   
(c)  $pq$  (d)  $pq(p+q)$
38. If the roots of the quadratic equation  $x^2 + px + q = 0$  are  $\tan 30^\circ$  and  $\tan 15^\circ$  respectively, then the value of  $2 + p - q$  is  
(a) 3 (b) 0  
(c) 1 (d) 2
39. A straight line through the point (4, 5) is such that its intercept between the axes is bisected at A, then its equation is  
(a)  $3x + 4y = 20$  (b)  $3x - 4y + 7 = 0$   
(c)  $5x - 4y = 40$  (d)  $5x + 4y = 40$
40. The value of  $\int \frac{(x^2-1)dx}{x^3\sqrt{2x^4-2x^2+1}}$  is  
(a)  $2\sqrt{2 - \frac{2}{x^2} + \frac{1}{x^4}} + C$   
(b)  $2\sqrt{2 + \frac{2}{x^2} + \frac{1}{x^4}} + C$   
(c)  $\frac{1}{2}\sqrt{2 - \frac{2}{x^2} + \frac{1}{x^4}} + C$   
(d) None of the above
41. Coordinate of the focus of the parabola  $4y^2 + 12x - 20y + 67 = 0$  is  
(a)  $(-\frac{5}{4}, \frac{17}{2})$  (b)  $(-\frac{17}{2}, \frac{5}{4})$   
(c)  $(-\frac{17}{4}, \frac{5}{2})$  (d)  $(-\frac{5}{2}, \frac{17}{4})$
42. There are two circles in  $xy$  -plane whose equations are  $x^2 + y^2 - 2y = 0$  and  $x^2 + y^2 - 2y - 3 = 0$ . A point  $(x, y)$  is chosen at random inside the larger circle. Then the probability that the point has been taken from smaller circle is  
(a)  $\frac{1}{3}$  (b)  $\frac{2}{3}$
- (c)  $\frac{1}{2}$  (d)  $\frac{1}{4}$
43. In a triangle ABC, if the tangent of half the difference of two angles is equal to one third of the tangent of half the sum of the angles, then the ratio of the sides opposite to the angles is  
(a) 2 : 1 (b) 1 : 2  
(c) 3 : 1 (d) 1 : 1
44. If  $x^m y^n = (x + y)^{m+n}$ , then  $\frac{dy}{dx}$  is  
(a)  $\frac{x+y}{xy}$  (b)  $xy$   
(c)  $\frac{x}{y}$  (d)  $\frac{y}{x}$
45. If  $\cos^{-1} \frac{x}{2} + \cos^{-1} \frac{y}{3} = \phi$ , then  $9x^2 - 12xy \cos \phi + 4y^2$  is  
(a)  $-36 \sin^2 \phi$  (b)  $36 \sin^2 \phi$   
(c)  $36 \cos^2 \phi$  (d) 36
46. The value of  $3^{3-\log_3 5}$  is  
(a)  $\frac{5}{27}$  (b)  $\frac{27}{5}$   
(c)  $\frac{9}{5}$  (d)  $\frac{5}{9}$
47. There are two sets A and B with  $|A| = m$  and  $|B| = n$ . If  $|P(A)| - |P(B)| = 112$  then choose the wrong option (where  $|A|$  denotes the cardinality of A, and  $P(A)$  denotes the power set of A)  
(a)  $m + n = 11$  (b)  $2m - n = 1$   
(c)  $2m - n = 1$  (d)  $3n - m = 5$
48. The eccentricity of an ellipse, with its center at the origin is  $\frac{1}{3}$ . If one of the directrices is  $x = 9$ , then the equation of ellipse is:  
(a)  $9x^2 + 8y^2 = 72$   
(b)  $8x^2 + 9y^2 = 72$   
(c)  $8x^2 + 7y^2 = 56$



# ASPIRE STUDY MCA ENTRANCE CLASSES

8400072444, 7007286637 www.aspirestudy.in

Kanpur , Uttar Pradesh - 208024

(d)  $7x^2 + 8y^2 = 56$

49. If the angle of elevation of the top of a hill from each of the vertices A, B and C of a horizontal triangle is  $\alpha$ , then the height of the hill is

- (a)  $\frac{1}{2}b \tan \alpha \sec B$       (b)  $\frac{1}{2}b \tan \alpha \operatorname{cosec} A$   
(c)  $\frac{1}{2}c \tan \alpha \sin C$       (d)  $\frac{1}{2}a \tan \alpha \operatorname{cosec} A$

50. If  $(\vec{a} \times \vec{b}) \times \vec{c} = \vec{a} \times (\vec{b} \times \vec{c})$ , then

- (a)  $\vec{a}$  and  $\vec{b}$  are collinear  
(b)  $\vec{a}$  and  $\vec{b}$  are perpendicular  
(c)  $\vec{a}$  and  $\vec{c}$  are collinear  
(d)  $\vec{a}$  and  $\vec{c}$  are perpendicular

## ANALYTICAL ABILITY AND LOGICAL REASONING

1. Today is Wednesday. What would be the day after 61 days?

- (a) Tuesday      (b) Monday  
(c) Sunday      (d) Saturday

2. Identify the fifth number in the series: 122, 144, 166, 188, ?

- (a) 234      (b) 210  
(c) 345      (d) 310

3. Which of the following is the odd one from the given alternatives?

- (a) Driving      (b) Swimming  
(c) Sailing      (d) Diving

4. Fill in the blank:

HEC, JGE, LIG, NKI, \_\_\_\_\_

- (a) ONM      (b) PMK  
(c) HGF      (d) KMP

5. Choose the word opposite in meaning to the given word:

MITIGATE

- (a) Alleviate      (b) Tranquilize

- (c) Intensify      (d) Abate

6. DNN, FQQ, HTT, \_\_\_\_\_, LZZ

- (a) JXX      (b) JVV  
(c) JWW      (d) IWW

7. Select the pair of words, which are related in the same way as the capitalized words are related to each other.

BUTTERFLY : FREEDOM

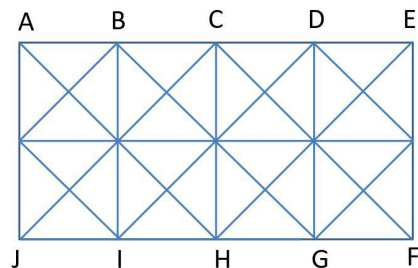
- (a) Horse : Speed  
(b) Self-reliant : Buoyant  
(c) Chicken : Rooster  
(d) Frog : Water

8. Select the pair of words, which are related in the same way as the capitalized words are related to each other.

FRUGAL : EXTRAVAGANT

- (a) Predecessor : Precursor  
(b) Hermit : Philosopher  
(c) Teacher : Philanthropist  
(d) Criticise : Advocate

9. In the following figure, find the total number of squares.



- (a) 18      (b) 24  
(c) 36      (d) 20

10. Deepak, Rahul, Manoj, and Vinod are brothers. Who is the heaviest?



# ASPIRE STUDY MCA ENTRANCE CLASSES

8400072444, 7007286637 www.aspirestudy.in

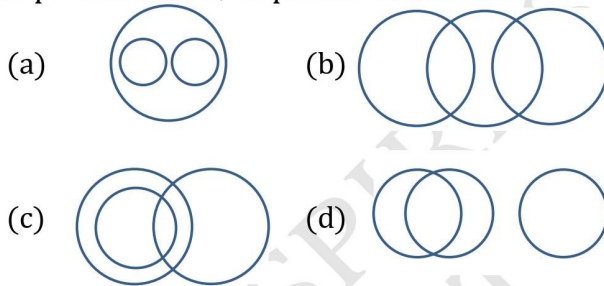
Kanpur , Uttar Pradesh - 208024

I. Rahul is heavier than Deepak and Vinod, but lighter than Manoj.

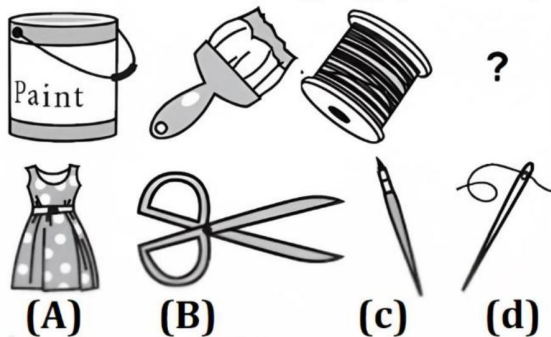
II. Deepak is lighter than Rahul and Manoj, but heavier than Vinod.

- (a) Either I or II is sufficient
- (b) Statement II alone is sufficient, but statement I alone is not sufficient
- (c) Statement I alone is sufficient, but statement II alone is not sufficient
- (d) Data in both the statements together are not sufficient

11. Which of the following diagrams correctly represents lions, elephants and animals?



12. Replace the question mark with an appropriate image to complete the analogous pair.



- (a) D
- (b) c
- (c) a
- (d) b

13. Fill in the blank:

JAK, KBL, LCM, MDN, \_\_\_\_\_

- (a) NEO
- (b) PEQ
- (c) OEP
- (d) MEN

14. Find the synonym that is most nearly similar in meaning to the word:

DEBACLE

- (a) Dandy
- (b) Corker
- (c) Catastrophe
- (d) Opulence

15. If in a certain language, KOLKOTA is coded as LPMLPUB, how is MUMBAI coded in that code?

- (a) NVNBCJ
- (b) NVNCBJ
- (c) NUNBCH
- (d) OVNBH

16. Select the related word from the given alternatives.

MELT : LIQUID :: FREEZE : ?

- (a) SOLID
- (b) PUSH
- (c) ICE
- (d) CONDENSE

17. Looking at the portrait of a man, Manu said, "Her mother is the wife of my father's son and I have no brother and sister." Whose portrait was Manu looking at?

- (a) His son
- (b) His father
- (c) His nephew
- (d) His daughter

18. Identify the sixth number in the series:

6, 11, 21, 36, 56, ?

- (a) 52
- (b) 21
- (c) 81
- (d) 82

19. U, V, W, X and T are sitting on a bench. T is sitting next to U, V is sitting next to W, W is not sitting with X who is on the left end of the bench. V is in the second position from the right. T is to the right of U and X. T and V are sitting together. In which position T is sitting?

- (a) Between V and X
- (b) Between U and V
- (c) Between U and W
- (d) Between X and W





# ASPIRE STUDY MCA ENTRANCE CLASSES

8400072444, 7007286637 www.aspirestudy.in

Kanpur , Uttar Pradesh - 208024

## Comprehension:

In each question below are given two statements followed by two conclusions numbered I and II. You have to take the given two statements to be true even if they seem to be at variance from commonly known facts.

Read the conclusion and then decide which of the given conclusions logically follows from the two given statements, disregarding commonly known facts.

### 20. Statements:

No women teacher can play.  
Some women teachers are athletes.

### Conclusions:

- I. Male athletes can play.
- II. Some athletes can play.
- (a) Neither I nor II follows
- (b) Only conclusion II follows
- (c) Either I or II follows
- (d) Only conclusion I follows

### 21. Statements:

All mangoes are golden in colour.  
No golden-coloured things are cheap.

### Conclusions:

- I. All mangoes are cheap.
- II. Golden-coloured mangoes are not cheap.
- (a) Only conclusion I follows
- (b) Either I or II follows
- (c) Only conclusion II follows
- (d) Neither I nor II follows

### 22. Statements:

All young scientists are open-minded.  
No open-minded men are superstitious.

### Conclusions:

- I. No scientist is superstitious.
- II. No young people are superstitious.

- (a) Only conclusion I follows
- (b) Only conclusion II follows
- (c) Neither I nor II follows
- (d) Either I or II follows

23. Six books are labelled A, B, C, D, E and F and are placed side by side. Books B, C, E and F have green covers while others have yellow covers. Books A, B and D are new while the rest are old volumes. Books A, B and C are law reports while the rest are medical extracts. Which two books are old medical extracts and have green covers?

- (a) C and E
- (b) B and C
- (c) E and F
- (d) C and F

24. Find out the wrong number in the FOLLOWING series.

2, 5, 10, 17, 26, 38, 50, 65

- (a) 50
- (b) 65
- (c) 26
- (d) 38

25. Find out the wrong number in the FOLLOWING series.

30, -5, -45, -90, -145, -195, -255

- (a) -145
- (b) -255
- (c) -195
- (d) -5

## Comprehension:

The following questions are based on the pie-charts given below.

Percentage-wise distribution of students studying in Arts and Commerce in seven different institutions - A, B, C, D, E, F and G.

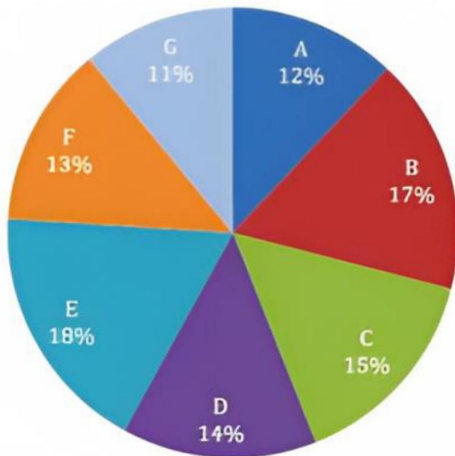
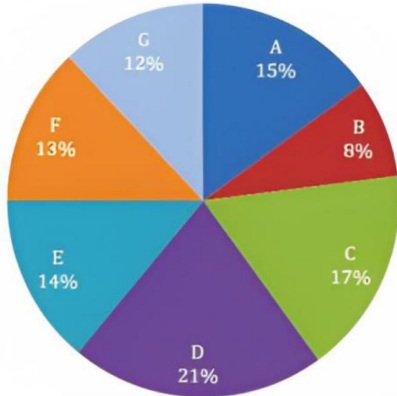


# ASPIRE STUDY MCA ENTRANCE CLASSES

8400072444, 7007286637 www.aspirestudy.in

Kanpur , Uttar Pradesh - 208024

Total number of students in Arts=3800



26. What is the total number of students studying Arts in Institutes A and G together?  
(a) 1226 (b) 1206  
(c) 1126 (d) 1026
27. How many students from Institute B study Arts and Commerce?  
(a) 1208 (b) 1108  
(c) 1018 (d) 1180
28. The ratio of the number of students studying Arts to that studying commerce in Institute E is.  
(a) 19 : 16 (b) 19 : 27  
(c) 19 : 28 (d) 27 : 14

29. Statement:

Many shops in the local market have extended their shops and occupied most part of the footpath in front of their shops.

### Course of Action

- I. The civic authority should immediately activate a task force to clear all the footpaths encroached by the shop owners.
  - II. The civic authority should charge hefty penalty to the shop owners for occupying the footpath
  - III. The civic authority should setup a monitoring system so that encroachments do not recur in future.
- (a) None follows  
(b) I and II follows  
(c) II and III follow  
(d) All I, II and III follows

30. **Statement:**

There is a significant increase in the number of patients affected by some disease in a city

### Course of action:

- I. Municipal Corporation of the city should take immediate action.
  - II. This problem should be raised in the UNESCO.
  - III. Hospitals in the city should be equipped properly for the treatment of the patients
- (a) All follow (b) I and II follow  
(c) Only III follow (d) I and II follow

**Direction: Read the following information carefully and answer the questions.**

Five Dramas A, B, C, D and E have to be staged in 6 hour where 1 hour needs to be given per drama.

- I. A break of 1 hour has to be taken in third or four hour.



# ASPIRE STUDY MCA ENTRANCE CLASSES

8400072444, 7007286637 www.aspirestudy.in

Kanpur , Uttar Pradesh - 208024

- II. Drama show cannot be started with A and cannot end in C
- III. D has to follow B immediately with no break in between.
- IV. A cannot be done immediately after D
- V. A has to precede E immediately with no break in between.
31. Which hour is a break hour?  
(a) 5th (b) 2<sup>nd</sup>  
(c) 4th (d) 3<sup>rd</sup>
32. Which is the drama to be staged first?  
(a) None of these (b) B  
(c) D (d) A
33. Which is the drama staged immediately after the break?  
(a) D (b) None of these  
(c) A (d) B
34. Which drama is staged immediately after D?  
(a) E (b) C  
(c) B (d) None of these
35. Which drama is staged immediately after E?  
(a) C (b) A  
(c) None of these (d) E
36. Running at the same constant rate, 6 identical machines can produce a total of 270 bottles per minute. At this rate, how many bottles could 10 such machines produce in 4 minutes?  
(a) 10800 (b) 648  
(c) 1800 (d) 2700
37. At what time, in minutes, between 3 o'clock and 4 o'clock, both the needles will coincide each other?  
(a)  $5\frac{1}{11}$  (b)  $12\frac{4}{11}$   
(c)  $13\frac{4}{11}$  (d)  $16\frac{4}{11}$
38. 1. A is the brother of B  
2. C is the father of A  
3. D is brother of E.  
4. E is the daughter of B  
Then, the uncle of D is?  
(a) A (b) E  
(c) B (d) C
39. A person's present age is two-fifth of the age of his mother. After 8 years, he will be one half of the age of his mother. What is the present age of the mother?  
(a) 40 (b) 30  
(c) 60 (d) 50
40. The greatest number which on dividing 1657 and 2037 leaves remainders 6 and 5 respectively is  
(a) 127 (b) 235  
(c) 123 (d) 305
- ### COMPUTER AWARENESS
1. The maximum and minimum value represented in signed 16 bit 2's complement representations are  
(a) -16384 and 16383  
(b) 0 and 32767  
(c) 0 and 65535  
(d) -32768 and 32767
2. The minimum number of NAND gates required for implementing the Boolean expression,  $AB + \overline{A}BC + A\overline{B}C$  is:  
(a) 1 (b) 0  
(c) 2 (d) 3
3. Which of the following is equivalent to the Boolean expression:  
 $(X + Y). (X + \overline{Y}). (\overline{X} + Y)$   
(a)  $XY$  (b)  $X\overline{Y}$   
(c)  $\overline{X}Y$  (d)  $\overline{X}\overline{Y}$



# ASPIRE STUDY MCA ENTRANCE CLASSES

8400072444, 7007286637 www.aspirestudy.in

Kanpur , Uttar Pradesh - 208024

4. Suppose the largest  $n$  bit number requires 'd' digits in decimal representation. Which of the following relations between 'n' and 'd' is approximately correct  
(a)  $d = 2^n$  (b)  $n = 2^d$   
(c)  $d < n \log_{10} 2$  (d)  $d > n \log_{10} 2$
5. If a processor clock is rated as 2500 million cycles per second, then its clock period is:  
(a)  $2.50 \times 10^{-10}$  sec  
(b)  $4.00 \times 10^{-10}$  sec  
(c)  $1.00 \times 10^{-10}$  sec  
(d) None of the above
6. Write the simplified form of the Boolean expression  
 $(A + C)(AD + AD') + AC + C$   
(a)  $A + C'$  (b)  $A' + C$   
(c)  $A + D$  (d)  $A + C$
7. FFFF will be the last memory location in a memory of size  
(a) 1k (b) 64k  
(c) 32k (d) 16k
8. 'Floating point representation' is used to represent  
(a) Integers (b) Whole Numbers  
(c) Real Numbers (d) Boolean Values
9. The Boolean expression  $AB + AB' + A'C + AC$  is unaffected by the value of the Boolean variable  
(a) A (b) None of these  
(c) C (d) B
10. If a signal passing through a gate is inhibited by sending a low into one of the inputs, and the output is HIGH, the gate is a(n):  
(a) NOR (b) AND  
(c) OR (d) NAND
1. What can you call a person who leads an unconventional style of living?  
(a) Altruist (b) Agnostic  
(c) Bohemian (d) Cynic
2. "Bite the bullet" means  
(a) to stop a conflict  
(b) to analyse your faults  
(c) to become mad  
(d) to accept something that is difficult or unpleasant
3. Fill in the blanks with the correct option technical writing demands \_\_\_\_ use of language.  
(a) Dramatic (b) Poetic  
(c) Figurative (d) Factual
4. Select correct articles  
He is \_\_\_\_ M.A. with PhD and teaches in \_\_\_\_ university.  
(a) a, an (b) the, the  
(c) a, the (d) an, the
5. Fill in the blank with the most appropriate option  
Kedar \_\_\_\_ this project for a month and now he is about to join a new project.  
(a) guiding (b) guides  
(c) has been guiding (d) guided
6. Select the correct form of verb/ Subject verb agreement  
The principal, along with his assistants, \_\_\_\_ the meeting.  
(a) is attending (b) attending  
(c) attend (d) are attending

Choose the correct alternative

## GENERAL ENGLISH



# ASPIRE STUDY MCA ENTRANCE CLASSES

8400072444, 7007286637 [www.aspirestudy.in](http://www.aspirestudy.in)

Kanpur , Uttar Pradesh - 208024

The country cleared this **path and paved** it with packed gravel, so they would have a peaceful place to hike and bike.

7. Which of the following alternatives to the underlined portion would NOT be acceptable?
- (a) path, paving
  - (b) path and then paved
  - (c) path before paving
  - (d) path paved

## COMPREHENSION:

Read the following passage carefully and answer the questions:

You might think you've experienced VR, and you might have been pretty impressed. Particularly if you're a gamer, there are some great experiences to be had out there (or rather, in there) today.

But over the next few years, in VR, as in all fields of technology, we're going to see things that make what is cutting-edge today look like Space Invaders. And although the games will be amazing, the effects of this transformation will be far broader, touching on our work, education, and social lives.

Today's most popular VR applications involve taking total control of a user's senses (sight and hearing, particularly) to create a totally immersive experience that places the user in a fully virtual environment that feels pretty realistic.

Climb up something high and look down, and you're likely to get a sense of vertigo. If you see an object moving quickly towards your head, you'll feel an urge to duck out of the way.

Very soon, VR creators will extend this sensory hijacking to our other faculties – for example, touch and smell – to deepen that sense of immersion. At the same time, the devices we use to visit these virtual worlds

will become cheaper and lighter, removing the friction that can currently be a barrier.

I believe extended reality (XR) – a term that covers virtual reality (VR), augmented reality (AR), and mixed reality (MR) – will be one of the most transformative tech trends of the next five years. It will be enabled and augmented by other tech trends, including super-fast networking, that will let us experience VR as a cloud service just like we currently consume music and movies. And artificial intelligence (AI) will provide us with more personalized virtual worlds to explore, even giving us realistic virtual characters to share our experiences with.

8. The passage states all the following about VR applications except
- (a) Vertigo is a major feature of all AI applications
  - (b) VR applications creates a virtual environment that feels pretty realistic
  - (c) Future AI will allow us to share our experiences with realistic virtual characters
  - (d) VR applications takes control of the user's senses
9. 'Duck out of something' means
- (a) To hit something hard
  - (b) To avoid doing something
  - (c) To fall down
  - (d) To meet with an accident
10. Select an antonym for the word 'augment' from the options given below:
- (a) Aggrandize
  - (b) Reinforce
  - (c) Curtail
  - (d) Inflate
11. Select the word which means the same as the following:



# ASPIRE STUDY MCA ENTRANCE CLASSES

8400072444, 7007286637 www.aspirestudy.in

Kanpur , Uttar Pradesh - 208024

To read something carefully

- (a) Presume (b) Peruse  
(b) Perverse (d) Persiflage

12. Choose the correct alternative with the correct choice given below each statement:

You are to conform \_\_\_\_\_ the rules of the institute.

- (a) with (b) to  
(c) of (d) on

13. Choose the antonym:

**BOLD**

- (a) Fearful (b) Coy  
(c) Timid (d) Nervous

14. Select the one which best expresses the same sentence in indirect/direct speech:

He said, "I am glad to be here this evening."

- (a) He said he was glad to be here this evening.  
(b) He says he was glad to be here this evening.  
(c) He asked he is glad to be here this evening  
(d) He said that he was glad to be there that evening

15. Identify the word that is similar in meaning to the underlined word.

Raghu made adulatory remarks about the waiter who served the food.

- (a) Complimentary (b) Ironic  
(c) Slanderous (d) Derogatory

16. Which of the phrase given below should replace the phrase printed in bold to make the sentence grammatically correct.

He is **addicted to smoke**.

- (a) used to smoke  
(b) addicted with smoking

- (c) addict of smoking  
(d) addicted to smoking

17. Fill in the blanks with the correct preposition

Jagdish is waiting for me \_\_\_\_\_ the campus.

- (a) In (b) On  
(c) At (d) Out

18. Read the following sentence to find if there is any error in any part:

(A) If I were him/ (B) I would teach/ (C) him a lesson/ (D) No error

- (a) I would teach (b) If I were him  
(c) him a lesson (d) No error

19. Choose the synonym.

**LIBERAL**

- (a) Sober (b) Generous  
(d) Reactionary (d) Affectionate

20. Fill in the blank

Neither Peter nor I \_\_\_\_\_ responsible for this blunder

- (a) were (b) is  
(c) am (d) are

# Answer Key NIMCET 2022

## MATHEMATICS

1	B	2	B	3	B	4	A	5	A	6	B	7	B	8	D	9	A	10	C
11	C	12	D	13	C	14	A	15	A	16	B	17	C	18	C	19	B	20	A
21	A	22	B	23	B	24	D	25	C	26	A	27	B	28	C	29	B	30	A
31	A	32	A	33	A	34	B	35	A	36	D	37	A	38	B	39	B	40	B
41	B	42	C	43	B	44	D	45	D	46	D	47	A	48	B	49	A	50	C

## ANALYTICAL ABILITY AND LOGICAL REASONING

1	B	2	B	3	A	4	B	5	C	6	C	7	A	8	D	9	B	10	C
11	C	12	A	13	A	14	C	15	B	16	A	17	D	18	C	19	B	20	A
21	C	22	C	23	C	24	D	25	A	26	D	27	C	28	B	29	D	30	B
31	D	32	B	33	B	34	B	35	C	36	C	37	C	38	A	39	A	40	A

## COMPUTER AWARENESS

1	D	2	C	3	A	4	D	5	A	6	D	7	B	8	C	9	D	10	D
---	---	---	---	---	---	---	---	---	---	---	---	---	---	---	---	---	---	----	---

## GENERAL ENGLISH

1	C	2	D	3	D	4	D	5	C	6	A	7	D	8	A	9	B	10	C
11	B	12	B	13	C	14	D	15	A	16	D	17	B	18	D	19	B	20	C